

MATH 223

Some Notes on Assignment 24

Exercises 21, 22, 24, 26 and 27 of Chapter 6.

21: Find the Jacobian of the transformation $T(u, v) = (u \cos v, u \sin v)$. For which points in the plane is T one-to-one?

Solution: $Jacobian = \begin{pmatrix} (u \cos v)_u & (u \cos v)_v \\ (u \sin v)_u & (u \sin v)_v \end{pmatrix} = \begin{pmatrix} \cos v & -u \sin v \\ \sin v & u \cos v \end{pmatrix}$

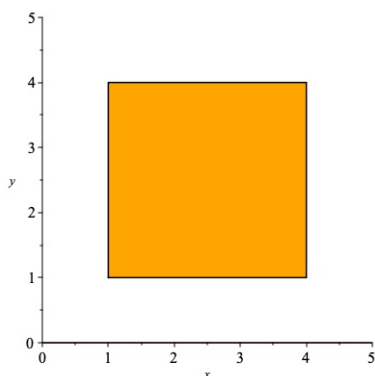
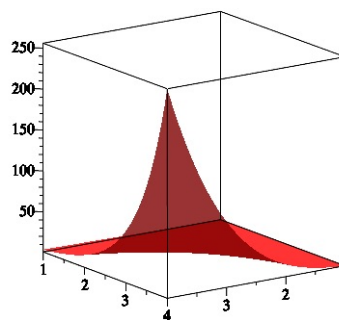
which has determinant $u \cos^2 v + u \sin^2 v = u$. Thus T is one-to-one at every point (u, v) where $u \neq 0$; that is, the vertical axis.

22: Define $T(u, v) = (u, v, u^v)$ for $u > 0$. Note that T maps a subset of \mathbb{R}^2 into a subset of \mathbb{R}^3 .

(a) Determine the Jacobian matrix of this transformation.

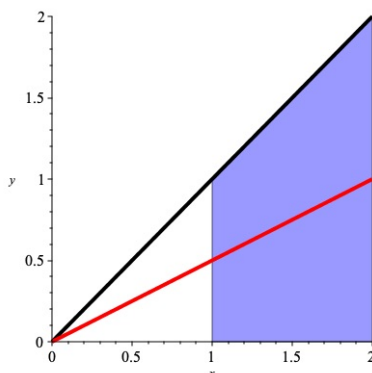
(b) Let S be the square with vertices $(1,1)$, $(1, 4)$, $(4,1)$, $(4,4)$. What is the image of S under the transformation T ?

Solution: (a) $Jacobian = \begin{pmatrix} 1 & 0 \\ 0 & 1 \\ vu^{v-1} & u^v \ln u \end{pmatrix}$

The Square S Image $(T(S))$

24: Let \mathcal{R} be the region $\{(x, y) : 1 \leq x \leq 2, 0 \leq y \leq x\}$ and $f(x, y) = \frac{\sqrt{x^2 + y^2}}{x}$. Find $\iint_{\mathcal{R}} f$ using the change of variable $x = r \cos \theta, y = r \sin \theta$.

Solution: Note the change of variables is the standard polar coordinate transformation. The figure below shows \mathcal{R} as the shaded below region. The red line represents an arbitrary angle θ between 0 and $\pi/4$. The red line intersects the vertical line $x = 1$ at the point with polar coordinates $(r, \theta) = (\sec \theta, \theta)$ and it intersects the vertical line at $x = 2$ at the point with polar coordinates $(r, \theta) = (2 \sec \theta, \theta)$. Thus in terms of polar coordinates the region \mathcal{R} is described as $\{(r, \theta) : 0 \leq \theta \leq \pi/4, \sec \theta \leq r \leq 2 \sec \theta\}$.



We also have

$$f(x, y) = \frac{\sqrt{x^2 + y^2}}{x} = \frac{\sqrt{r^2 \cos^2 \theta + r^2 \sin^2 \theta}}{r \cos \theta} = \sec \theta$$

Thus

$$\iint_{\mathcal{R}} f = \int_{\theta=0}^{\theta=\pi/4} \int_{r=\sec\theta}^{r=2\sec\theta} r \sec\theta \, dr \, d\theta = \int_{\theta=0}^{\theta=\pi/4} \left(2\sec^3\theta - \frac{1}{2}\sec^3\theta \right) d\theta = \int_{\theta=0}^{\theta=\pi/4} \frac{3}{2}\sec^3\theta \, d\theta$$

which evaluates to $\frac{3}{4}(\ln(1+\sqrt{2}) + \sqrt{2})$.

26: Let A be the region in the first quadrant bounded by the curves $xy = 7$, $xy = 3$, $y^2 - x^2 = 9$ and $y^2 - x^2 = 16$ and $I = \iint_A (x^2 + y^2) \, dA$. (a) Sketch the region A .

(b) Consider the transformation defined by $u = xy, v = y^2 - x^2$ and show the Jacobian of this transformation is $\begin{pmatrix} y & x \\ -2x & 2y \end{pmatrix}$.

(c) Show that the transformation sends A to the rectangular region in the (u, v) -plane with $3 \leq u \leq 7, 9 \leq v \leq 16$.

(d) Show that $I = \int_9^{16} \int_3^7 \frac{x^2+y^2}{2y^2+2x^2} \, du \, dv = 14$

Solution: (a) Figure 3 shows the region.

(b) Jacobian = $\begin{pmatrix} (xy)_x & (xy)_y \\ (y^2 - x^2)_x & (y^2 - x^2)_y \end{pmatrix} = \begin{pmatrix} y & x \\ -2x & 2y \end{pmatrix}$ which has determinant $2x^2 + 2y^2 = 2(x^2 + y^2)$.

(c) The points in A satisfy $3 \leq xy \leq 7, 9 \leq y^2 - x^2 \leq 16$ which becomes $3 \leq u \leq 7, 9 \leq v \leq 16$. Figure 4 shows this rectangle in the uv -plane.

(d) Since the determinant of the Jacobian is $2(x^2 + y^2)$, The change of variable formula shows $I = \iint_A (x^2 + y^2) \, dA = \int_{u=3}^{u=7} \int_{v=9}^{v=16} \frac{1}{2} \, dv \, du = \frac{1}{2} \text{Area of Rectangle} = \frac{1}{2}(4 \times 7) = 14$

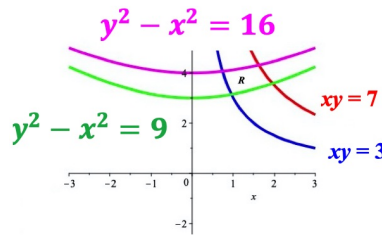


Figure 3

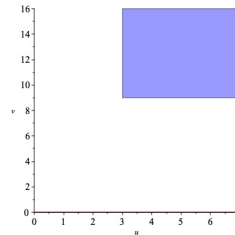


Figure 4

27: In the previous exercise, we did not solve for x and y in terms of u and v before computing the Jacobian matrix and its determinant. In this exercise, we outline how that approach might have worked.

1. Solve $u = xy, v = y^2 - x^2$ in the region A to show

$$x = \sqrt{\frac{-v + \sqrt{v^2 + 4u^2}}{2}}, y = \sqrt{\frac{v + \sqrt{v^2 + 4u^2}}{2}}$$

2. Find the Jacobian matrix for the transformation indicated in (a) and show that its determinant simplifies to

$$\frac{1}{2\sqrt{4u^2 + v^2}}$$

Solution: Straightforward, but cumbersome differentiation shows the Jacobian matrix is

$$\begin{pmatrix} \frac{2u}{\sqrt{4u^2+v^2} \left(\sqrt{-2v+2\sqrt{4u^2+v^2}} \right)} & \frac{-2 + \frac{2v}{\sqrt{4u^2+v^2}}}{4 \left(\sqrt{-2v+2\sqrt{4u^2+v^2}} \right)} \\ \frac{2u}{\sqrt{4u^2+v^2} \left(\sqrt{2v+2\sqrt{4u^2+v^2}} \right)} & \frac{2 + \frac{2v}{\sqrt{4u^2+v^2}}}{4 \left(\sqrt{2v+2\sqrt{4u^2+v^2}} \right)} \end{pmatrix}$$

The determinant is

$$\frac{2u}{\sqrt{4u^2 + v^2} \sqrt{-2v + 2\sqrt{4u^2 + v^2}} \sqrt{2v + 2\sqrt{4u^2 + v^2}}}$$

Note that the last two factors in the denominator are of the form $\sqrt{-A+B}\sqrt{A+B} = \sqrt{B^2 - A^2}$ where $A = 2v$ and $B = 2\sqrt{4u^2 + v^2}$ so $\sqrt{B^2 - A^2} = \sqrt{4(4u^2 + v^2) - 4v^2} = \sqrt{16u^2} = 4u$. The determinant then simplifies to $\frac{2u}{4u\sqrt{4u^2+v^2}} = \frac{1}{2\sqrt{4u^2+v^2}}$

3. Verify that $x^2 + y^2 = \sqrt{4u^2 + v^2}$.

Solution: $4u^2 + v^2 = 4(x^2y^2) + (y^2 - x^2)^2 = 4x^2y^2 + y^4 - 2x^2y^2 + x^4 = x^4 + 2x^2y^2 + y^4 = (x^2 + y^2)^2$

4. Use this approach to show

$$\iint_A (x^2 + y^2) dA = \int_9^{16} \int_3^7 \frac{x^2 + y^2}{2y^2 + 2x^2} du dv$$

Solution: Apply Change of Variable Theorem